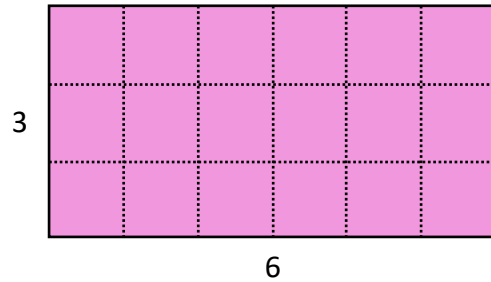
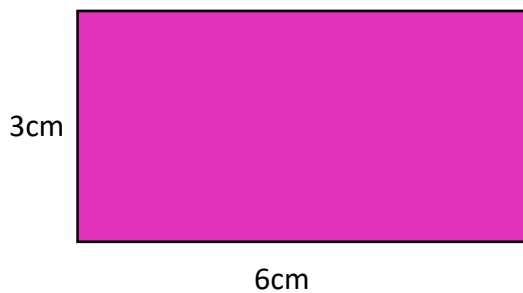


AREA av FYRHÖRNINGAR

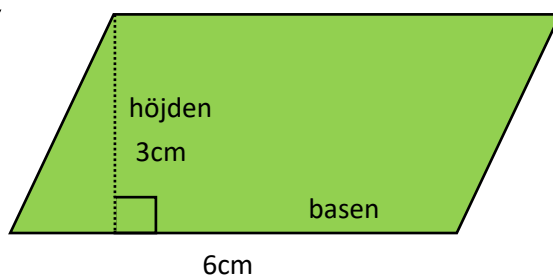
Arealen av en REKTANGEL
räknar vi ut med multiplikation



$$3\text{cm} \times 6\text{cm} = 18\text{cm}^2$$

cm x cm = cm²

Arealen av ett PARALLELLOGRAM
basen x höjden



$$6\text{cm} \times 3\text{cm} = 18\text{cm}^2$$